

UNIT 3. EUROPE: GEOGRAPHY

REVIEW

EUROPE

1. What is the smallest continent? _____

2. How many countries are there in Europe? _____

3. Where is Spain located in Europe? _____

4. What is the smallest country in Europe? And the largest? _____

5. What are the boundaries of Europe?

Seas	Oceans	Mountains

6. What European country has territories in the African continent? Can you name them?

7. Which European countries are totally bordered by water? _____

8. What is the difference between Europe as a continent and the European Union?

9. Complete these sentences.

- a. Europe's population is _____ which represents about the _____% of the total world population.
- b. There are _____ countries in Europe
- c. Europe has the _____ Ocean in the west.
- d. The _____ forma a natural division between Europe and _____

10. Which countries are on the Mediterranean Sea? Which countries are on the Baltic Sea?

Croacia - Andorra - Bélgica - Grecia - Eslovenia - Ucrania - Bulgaria - Austria - Turquía - Portugal - Rumanía - Chipre

Mediterranean Sea	Baltic Sea

11. Which that sea separates Europe from Asia located is between Greece and Turkey?


12. Look at the map of the European countries and write clues. You partner has to guess the country.


- This is a big/small country.
- It's between and
- It's capital is.....


13. How many European landmarks can you name?

14. List all the languages you can think of that are spoken on the continent of Europe. Do some research and check your answers.

15. Choose three European countries and draw their flags.







RELIEF

16. Look at a physical map and name....

- a. a plain: _____
- b. three high mountain ranges: _____
- c. two low mountain ranges: _____

17. Look at a map of the European Relief. Order these mountains from east to west.

the Alps - the Pyrenees - the
Urals - the Caucasus - the
Carpathian Mountains

- 1.- _____
- 2.- _____
- 3.- _____
- 4.- _____
- 5.- _____

18. Match to make sentences.

- | | |
|-------------------------------|---|
| a. The Alps | _____ is one of the biggest expanses of lowland in the world. |
| b. The Apennines | _____ are between Sweden and Norway. |
| c. The North European Plain | _____ form part of eight European countries. |
| d. The Scandinavian Mountains | _____ run down the centre of Italy. |

19. Find out about Europe's mountain ranges. Answer the questions.

- a. Which mountains in the south of Europe include the Alps?

- b. Which famous lake is in the Alps?

- c. Which is the second-longest mountain range in Europe?

COASTS & ISLANDS

20. Write questions for these answers

- a. _____
Corsica, Crete and Cyprus
- b. _____
The Scandinavian Peninsula
- c. _____
They are on the coast of Portugal
- d. _____
It's on the coasts of France and Spain.

21. Complete the table with examples of capes, gulfs and islands.

Country	Cape	Gulf	Island

22. What's the longest river in Europe? Search the internet about it. and make an index card including its name, length, flow, source, mouth, watershed and tributaries.

Name: _____

Length: _____

Flow: _____

Source: _____

Mouth: _____

Watershed: _____

Tributaries: _____

Countries it flows through: _____

RIVERS AND LAKES

23. Are the following sentences true or false? Correct the false ones.

a. The longest river in Europe is the Rhine.

b. The rivers that flow into the Atlantic Ocean have a lot of water.

c. The Danube is usually frozen in winter

d. The Rhine is a navigable river.

24. Match the rivers to the countries where they have their source.

- a. Volga _____ 1. Alemania
- b. Danube _____ 2. República Checa
- c. Loire _____ 3. Italia
- d. Elbe _____ 4. Francia
- e. Rhine _____ 5. Rusia
- f. Po _____ 6. Suiza

25. What's the main river in London? _____

26. Use a map to find two rivers from each watershed and complete the table.

WATERSHED	RIVERS
1.-	
2.-	
3.-	
4.-	
5.-	
6.-	
7.-	

27. Find out about the three largest European rivers and complete the information

River	Countries it flows through	Source	Mouth

28. Locate the following rivers in a map. Which countries are the mouths of these rivers?

1.- Tajo →	_____
2.- Oder →	_____
3.- Don →	_____
4.- Rin →	_____
5.- Vistula →	_____

29. Complete these sentences.

- The rivers of the Atlantic are _____
- Some important European rivers are _____
- The oceans and seas that border Europe are _____
- South Europe has high mountains such as _____

30. Define lake. _____

31. Complete the text about Europe.

Europe is the _____ smallest continent in the world after Oceania. To the north it reaches _____. To the south it reaches the _____. To the west it reaches the _____ Ocean and to the east it reaches the _____. Europe has _____ countries. The biggest country is _____ and the smallest country is _____.

REVIEW

32. Look at a political map of Europe and answer:

- What European countries consist of just islands? _____

- What European countries are bathed by the Baltic Sea? And by the Black Sea?
Baltic Sea: _____
Black Sea: _____
- What countries border Slovenia? _____
- Name the northernmost, southernmost, easternmost and westernmost countries?
Northernmost: _____ Easternmost: _____
Southernmost: _____ Westernmost: _____

33. Write questions for these answers.

- a. _____
The Apennines
- b. _____
The Caspian Sea
- c. _____
The Mediterranean Sea.
- d. _____
The Balkan Peninsula.

34. Look at the map of Europe.

Match A to F with the following:

- ___ The Scandinavian Mountains.
- ___ The Caucasus Mountains.
- ___ Iceland.
- ___ Cape Finisterre
- ___ The Great European Plain.
- ___ The Alps.



EUROPE: GEOGRAPHICAL BORDERS

Read the text about the geographical borders of Europe. Decide whether the sentences below are true or false.

Continents are usually defined as a huge landmass separated from other continents by water. However, if you look at a map of Europe, you can see that there is no water separating Europe from Asia.



These days, the boundary between Europe and Asia runs from the Aegean Sea (Mar Egeo) to the Dardanelles (Estrecho de los Dardanelos) and from the Sea of Marmara (Mar de Mármara) and the Bosphorus (Bósforo) to the Black Sea (Mar Negro). Then it follows the Caucasus mountains (Montañas del Cáucaso), the Caspian Sea (Mar Caspio), the Ural River (Río Ural) and the Ural Mountains (Montes Urales). Along this line some countries are split so that one part is in Asia and another part in Europe. Georgia, Azerbayán, Rusia and Kazajistán belong to this group and they are called transcontinental countries. Estambul in Turquía is an example of a transcontinental city. The remaining boundaries are clearer. The Mediterranean Sea (Mar Mediterráneo) separate Europe from Africa and the Atlantic Ocean forms the western boundary.

- The typical definition of a continent does not fit Europe. ____
- A transcontinental country is a country in two different continents. ____
- Russian territory covers two continents. ____
- The Black Sea is in the western part of Europe. ____

Find all these boundaries in a map.

<https://www.google.com/maps/place/Aegean+Sea/@38.4045095,23.1835511,7.03z/data=!4m5!3m4!1s0x14959c66749e1ba9:0x89058c37001751b2!8m2!3d39.019184!4d25.268555>